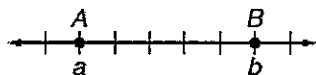


PRACTICE WORKSHEET – Measuring Segments


Distance on a Number Line



$$AB = |b - a| \text{ or } |a - b|$$

Segment Addition Postulate

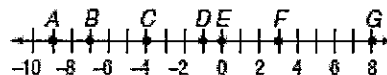
If B is between A and C, then $AB + BC = AC$.



Use the number line to find each measure.

1. BD

2. DG



3. AF

4. EF

5. BG

6. AG

7. BE

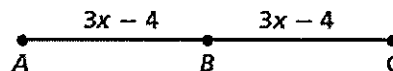
8. DE

If $AC = 58$, find the value of each of the following.

9. x _____

10. AB _____

11. BC _____



If $GJ = 32$, find the value of each of the following.

12. x _____

13. GH _____

14. HJ _____

